

Κάνε τις πράξεις που βρίσκονται μέσα στα μήλα του δέντρου.

Faites les faits.

سوال های ذیل را جمع نمایید سوال های که در داخل جدول بین سیب قرار دارد.

ساوي العمليات الحسابية الموجودة بداخل تفاح الشجرة .

Name _____

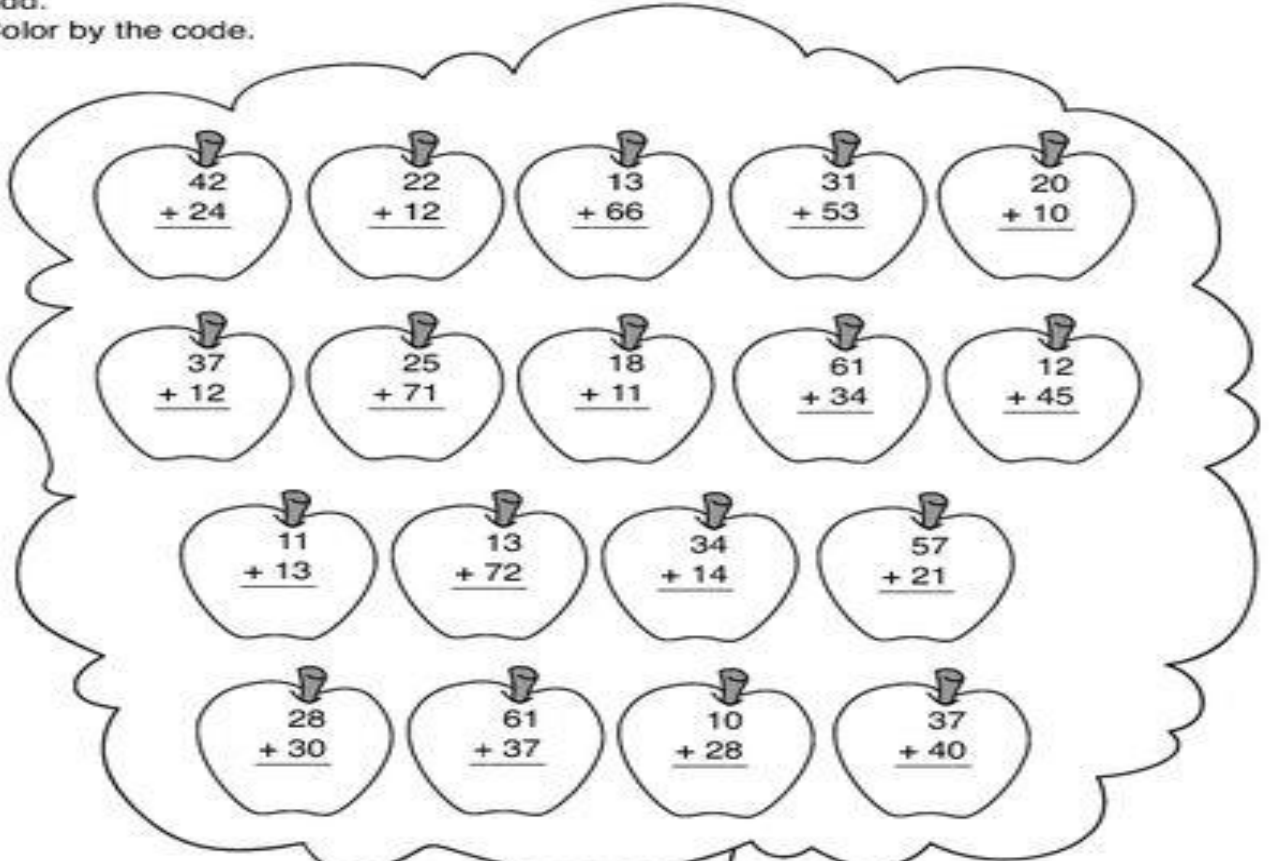
Fall (apples)

Two-digit addition without regrouping

Picking Apples

Add.

Color by the code.



Color Code
0-30 = red
31-60 = yellow
61-99 = green

©The Mailbox™ • Teacher's Helper™ • TEC17036 - Aug./Sept. 2008

63

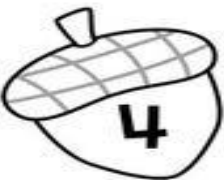





Κάνε τις πράξεις που βρίσκονται μέσα στις κολοκύθες.

Faites les faits.



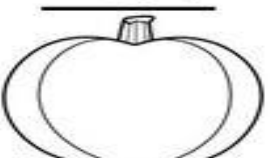

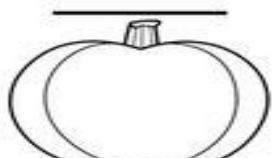

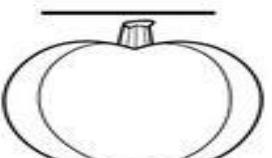
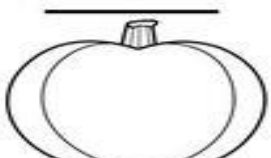
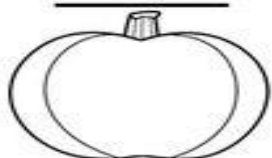
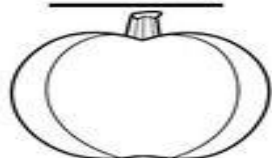
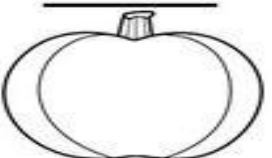
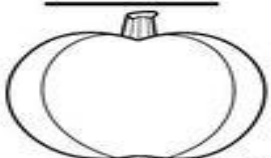
سوال های جمع که در بین چهار ضلعی قرار دار حل نمایی

ساوي العمليات الحسابية التالية بداخل القرع .

name: _____ date: _____

Add.

$\begin{array}{r} 25 \\ + 23 \\ \hline \end{array}$ 	$\begin{array}{r} 14 \\ + 65 \\ \hline \end{array}$ 	$\begin{array}{r} 63 \\ + 34 \\ \hline \end{array}$ 	$\begin{array}{r} 24 \\ + 41 \\ \hline \end{array}$ 
$\begin{array}{r} 21 \\ + 14 \\ \hline \end{array}$ 	$\begin{array}{r} 50 \\ + 30 \\ \hline \end{array}$ 	$\begin{array}{r} 52 \\ + 12 \\ \hline \end{array}$ 	$\begin{array}{r} 14 \\ + 72 \\ \hline \end{array}$ 
$\begin{array}{r} 41 \\ + 54 \\ \hline \end{array}$ 	$\begin{array}{r} 61 \\ + 12 \\ \hline \end{array}$ 	$\begin{array}{r} 67 \\ + 21 \\ \hline \end{array}$ 	$\begin{array}{r} 17 \\ + 41 \\ \hline \end{array}$ 

© 2014 Jessica Michèle