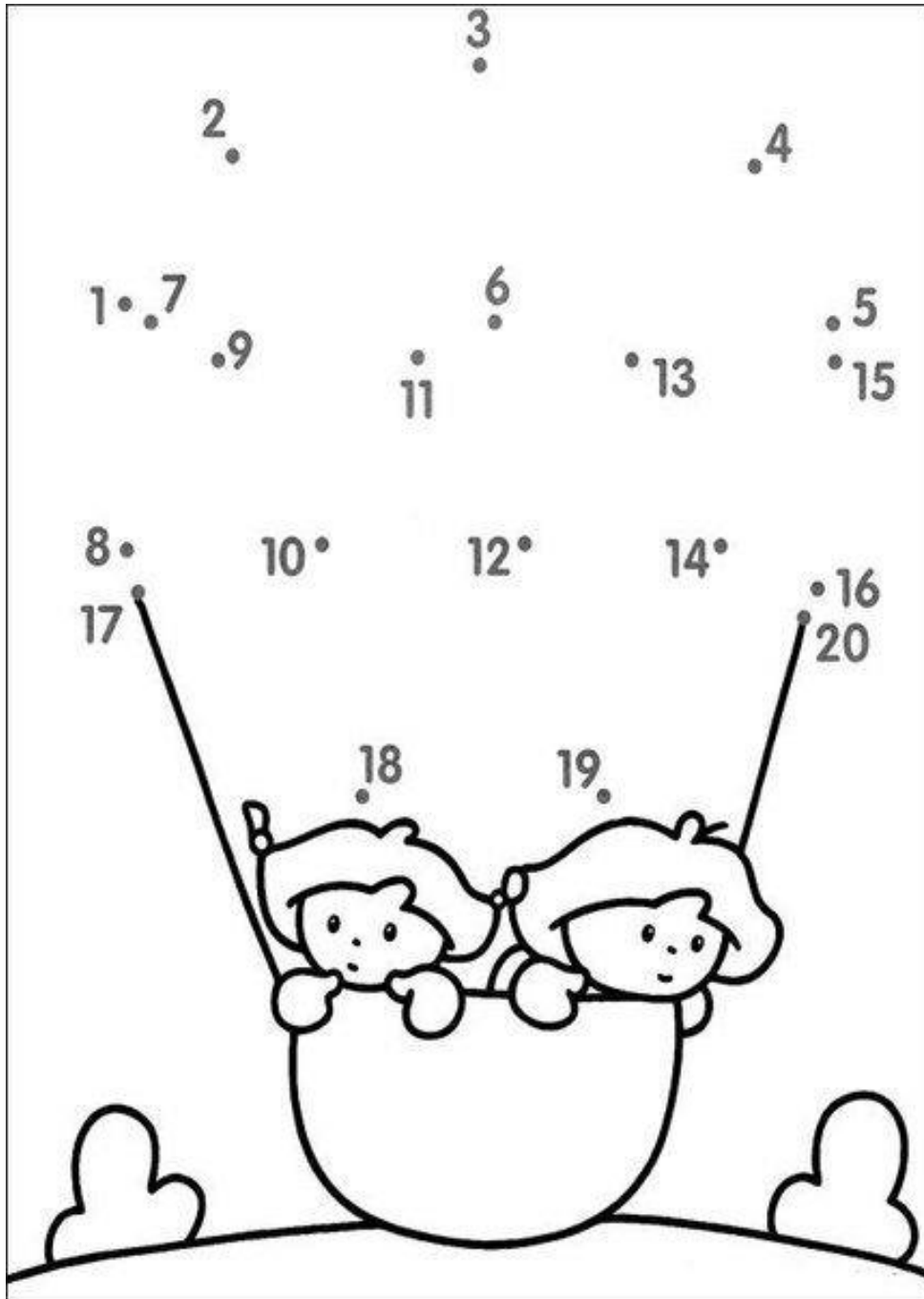


ΜΑΘΗΜΑΤΙΚΑ / MATHEMATICS / ریاضی

Ένωσε τις βούλες. Match the dots. Rejoignez les points. وصل النقاط.

اعداد را به هم وصل کنيد.



Μέτρησε τις βούλες και συμπλήρωσε τον αριθμό στα κουτάκια. Έπειτα κάνε τις πράξεις.  
Count the points and fill in the number on the boxes. Then do the operations. Mesurez les points et remplissez le nombre sur les cases. Faites ensuite les opérations.

عد النقاط و اكتب عددهم في الفراغ ثم قم بعمليات الجمع

تیشله ها را شمار نماید و تعداد آن را در جاهای خالی بنویسید و بعدا جمع نماید.

Name: \_\_\_\_\_

## 'Teen' Frames

●●●●●	●●●		
●●●●●			

$$\square + \square = \square$$

●●●●●	●●●●●	
●●●●●	●●●●●	

$$\square + \square = \square$$

●●●●●	●●		
●●●●●			

$$\square + \square = \square$$

●●●●●	●●●●●	
●●●●●		

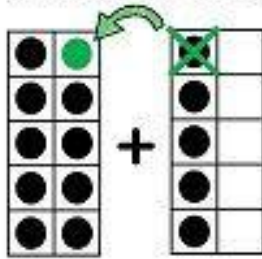
$$\square + \square = \square$$

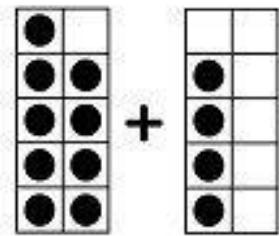
Name \_\_\_\_\_

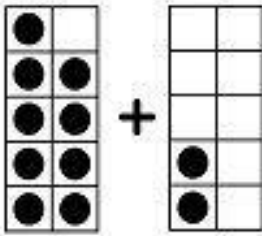


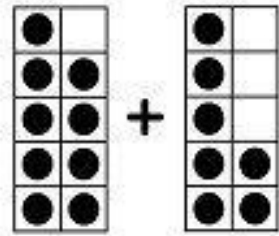
# make a 10 to add

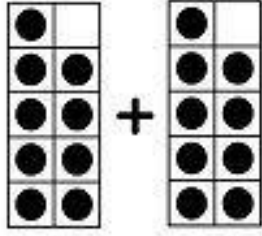
Make a 10 to help you add.

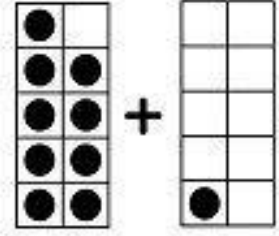

 $9 + 5 = \boxed{14}$

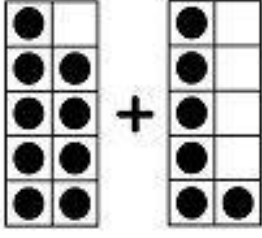

 $6 + 4 = \square$

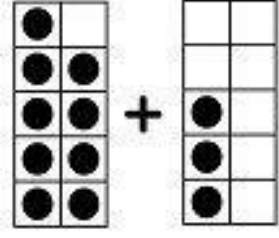

 $7 + 3 = \square$


 $8 + 2 = \square$


 $5 + 5 = \square$


 $9 + 1 = \square$


 $4 + 6 = \square$


 $3 + 7 = \square$

This was:    Easy    Just Right    Hard  
(Circle one)