

رياضي ΜΑΘΗΜΑΤΙΚΑ / MATHEMATICS


ΗΛΙΚΙΑΚΗ ΟΜΑΔΑ / AGE 9-12

Συμπλήρωσε τα κενά. / Write the missing numbers. / Remplissez les blancs.

أكمل الفراغات بالأرقام المناسبة. حانه خالی های ذیل را پر کنید یا تکمیل نمایید.

Name:

I can write the missing numbers to complete the number sequence to 100.



1	2	3	4		6	7		9	10
11	12		14	15		17	18		20
	22	23	24		26	27	28	29	30
31		33		35	36	37		39	40
41	42		44	45	46		48	49	50
51		53	54		56	57		59	60
61	62		64	65		67	68	69	70
	72	73	74		76	77	78	79	
81	82		84	85	86	87		89	90
91		93	94		96		98		100

By Learning Place 2016

Κάνε τις προσθέσεις./ Make the additions./ Faites les ajouts.

اكتب نتيجة عملية الجمع. سوال های جمع را جواب دهید..

NAME:



FALL Addition Practice!



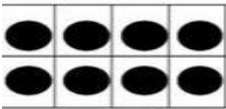
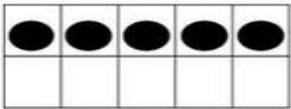
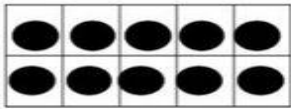
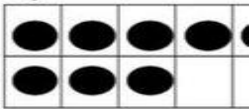

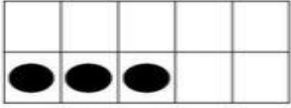
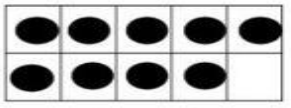
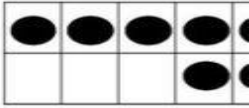

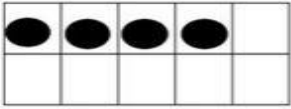
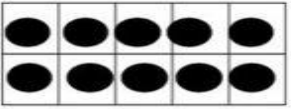
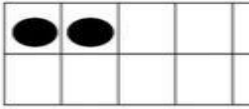
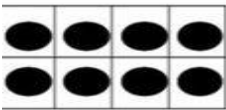
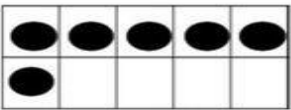
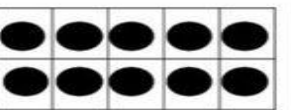

$5 + 3 = \underline{\quad}$	$2 + 8 = \underline{\quad}$	$5 + 1 = \underline{\quad}$
$3 + 2 = \underline{\quad}$	$8 + 4 = \underline{\quad}$	$7 + 4 = \underline{\quad}$
$6 + 3 = \underline{\quad}$	$6 + 4 = \underline{\quad}$	$7 + 3 = \underline{\quad}$
$4 + 5 = \underline{\quad}$	$8 + 2 = \underline{\quad}$	$5 + 4 = \underline{\quad}$
$2 + 3 = \underline{\quad}$	$4 + 1 = \underline{\quad}$	$8 + 1 = \underline{\quad}$
$9 + 5 = \underline{\quad}$	$7 + 8 = \underline{\quad}$	$9 + 0 = \underline{\quad}$
$5 + 5 = \underline{\quad}$	$7 + 2 = \underline{\quad}$	$6 + 7 = \underline{\quad}$
$9 + 6 = \underline{\quad}$	$10 + 5 = \underline{\quad}$	$8 + 3 = \underline{\quad}$
$10 + 6 = \underline{\quad}$	$4 + 5 = \underline{\quad}$	$6 + 5 = \underline{\quad}$
$9 + 3 = \underline{\quad}$	$8 + 8 = \underline{\quad}$	$8 + 9 = \underline{\quad}$
$9 + 2 = \underline{\quad}$	$9 + 8 = \underline{\quad}$	$8 + 7 = \underline{\quad}$
$6 + 1 = \underline{\quad}$	$3 + 7 = \underline{\quad}$	$4 + 5 = \underline{\quad}$

Μέτρησε τις βούλες και συμπλήρωσε την άσκηση./ Count the dots and complete the exercise./ Mesurez les points et terminez l'exercice.

عد الدوائر السوداء و اكتب نتيجة . تيشله يا حلقه گک های سیاه را شمار کنید و در داخل خانه خالی تعداد آن را بنویسید.

Name _____

Write the correct number sentences for the ten frames

  <input type="text"/> + <input type="text"/> = _____	  <input type="text"/> + <input type="text"/> = _____
  <input type="text"/> + <input type="text"/> = _____	  <input type="text"/> + <input type="text"/> = _____
  <input type="text"/> + <input type="text"/> = _____	  <input type="text"/> + <input type="text"/> = _____
  <input type="text"/> + <input type="text"/> = _____	  <input type="text"/> + <input type="text"/> = _____



PRAKSIS



UNHCR
The UN Refugee Agency


Συμπλήρωσε τις προσθέσεις./ Complete the additions./ Terminez les ajouts.

اكتب نتيجة عملية الجمع. سوال های جمع را حل نمایید..

Name: _____

Addition


Without regrouping


$$\begin{array}{r} 14 \\ +13 \\ \hline \end{array}$$
$$\begin{array}{r} 22 \\ +24 \\ \hline \end{array}$$
$$\begin{array}{r} 11 \\ +11 \\ \hline \end{array}$$
$$\begin{array}{r} 32 \\ +53 \\ \hline \end{array}$$
$$\begin{array}{r} 27 \\ +22 \\ \hline \end{array}$$
$$\begin{array}{r} 44 \\ +12 \\ \hline \end{array}$$
$$\begin{array}{r} 19 \\ +10 \\ \hline \end{array}$$
$$\begin{array}{r} 32 \\ +46 \\ \hline \end{array}$$
$$\begin{array}{r} 24 \\ +31 \\ \hline \end{array}$$
$$\begin{array}{r} 56 \\ +23 \\ \hline \end{array}$$
$$\begin{array}{r} 42 \\ +16 \\ \hline \end{array}$$
$$\begin{array}{r} 25 \\ +33 \\ \hline \end{array}$$
$$\begin{array}{r} 34 \\ +52 \\ \hline \end{array}$$
$$\begin{array}{r} 63 \\ +25 \\ \hline \end{array}$$
$$\begin{array}{r} 46 \\ +23 \\ \hline \end{array}$$
$$\begin{array}{r} 52 \\ +26 \\ \hline \end{array}$$
$$\begin{array}{r} 31 \\ +61 \\ \hline \end{array}$$
$$\begin{array}{r} 62 \\ +33 \\ \hline \end{array}$$

© 2010/2011/2012/2013

Συμπλήρωσε τις αφαιρέσεις./ Complete the subtractions./ Remplissez les déductions.


إكتب نتيجة عملية الطرح. سوال های منفی را جواب دهید.



Name _____

Monster Subtraction

Directions: Complete the subtraction problems.
Color the pictures.

$\begin{array}{r} 50 \\ - 20 \\ \hline \end{array}$	$\begin{array}{r} 20 \\ - 10 \\ \hline \end{array}$	$\begin{array}{r} 70 \\ - 50 \\ \hline \end{array}$	$\begin{array}{r} 30 \\ - 20 \\ \hline \end{array}$	$\begin{array}{r} 80 \\ - 40 \\ \hline \end{array}$
$\begin{array}{r} 60 \\ - 10 \\ \hline \end{array}$	$\begin{array}{r} 40 \\ - 20 \\ \hline \end{array}$	$\begin{array}{r} 50 \\ - 10 \\ \hline \end{array}$	$\begin{array}{r} 90 \\ - 30 \\ \hline \end{array}$	$\begin{array}{r} 10 \\ - 10 \\ \hline \end{array}$
$\begin{array}{r} 80 \\ - 20 \\ \hline \end{array}$	$\begin{array}{r} 30 \\ - 30 \\ \hline \end{array}$	$\begin{array}{r} 40 \\ - 10 \\ \hline \end{array}$	$\begin{array}{r} 70 \\ - 40 \\ \hline \end{array}$	$\begin{array}{r} 90 \\ - 20 \\ \hline \end{array}$
$\begin{array}{r} 60 \\ - 40 \\ \hline \end{array}$	$\begin{array}{r} 90 \\ - 10 \\ \hline \end{array}$	$\begin{array}{r} 80 \\ - 30 \\ \hline \end{array}$		

A Planning Playtime product. © 2016 by Amy Nielson. All rights reserved.