

ΜΑΘΗΜΑΤΙΚΑ / MATHEMATICS رياضي

ΗΛΙΚΙΑΚΗ ΟΜΑΔΑ / AGE 6-8

Συμπλήρωσε τους αριθμούς. / Fill in the numbers. / Remplissez les numéros. /





اعداد را در خانه خالی های ذیل بنویسید.

اكمل الأرقام

Name: \_\_\_\_\_

## Caterpillar Counting

Write the numbers that are missing

	1				4			7			9	
		2									8	
				3								10
	1								7			



PRAKSIS



UNHCR  
The UN Refugee Agency




Συμπλήρωσε τις πράξεις. Ζωγράφισε τις εικόνες./ Terminez les opérations. Peignez les images.

إكتب نتيجة عملية الجمع ثم لَوْن الأشكال الموجودة سؤال های جمع را حل نمایید و تصویر هاره رسم کنید..

Name \_\_\_\_\_

# Fox Friends Addition

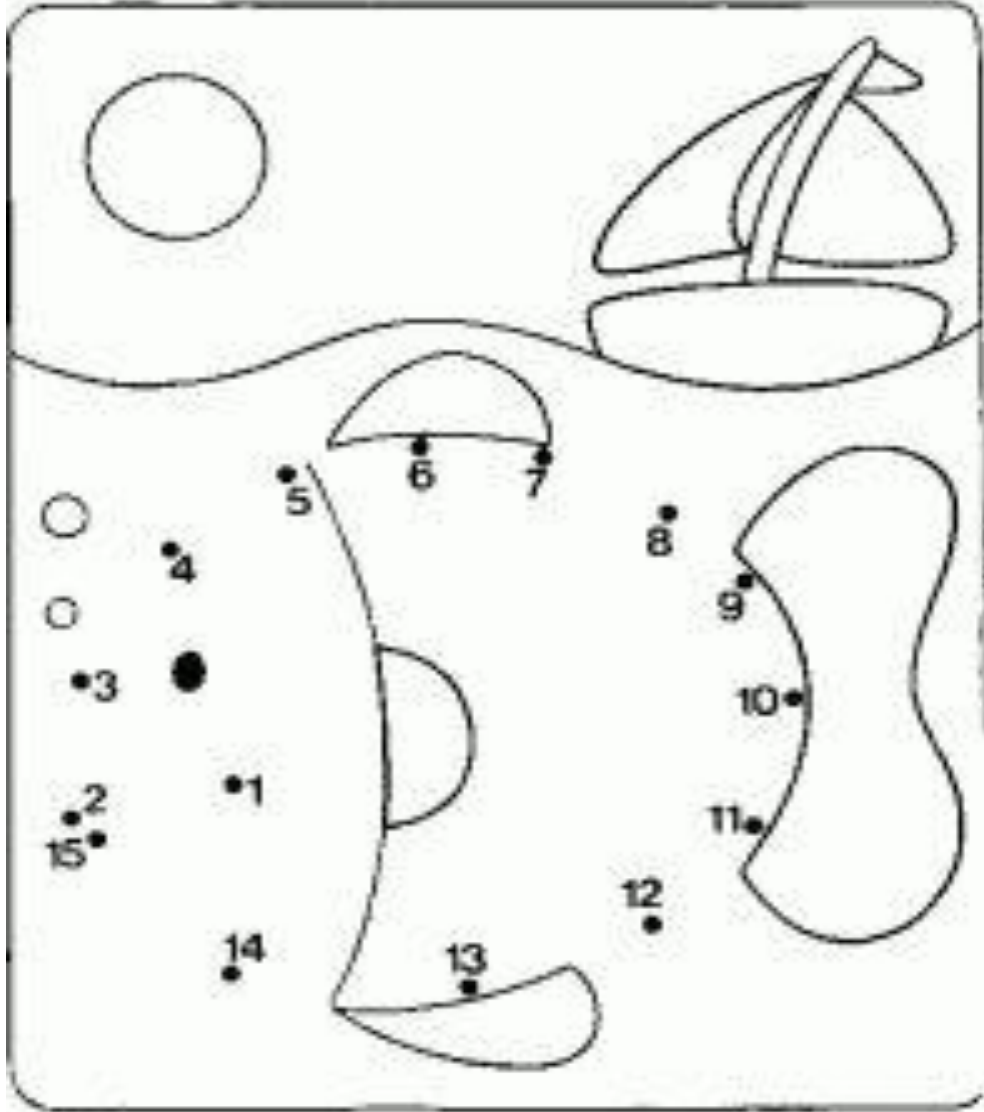
Directions: Fill in the sum. Color the pictures.

$2+6 = \square$		$8+2 = \square$
$5+4 = \square$		$3+4 = \square$
$1+3 = \square$		$7+2 = \square$
$3+7 = \square$		$6+4 = \square$
$4+4 = \square$		$5+0 = \square$
$6+3 = \square$		$4+2 = \square$
$3+2 = \square$		$4+4 = \square$
$2+1 = \square$		$2+5 = \square$

A Learning Playtime product. ©2011 by Amy Nelson. All rights reserved.

Ένωσε τις βούλες./ Match the dots./ Rejoignez les points.

أكمل رسم الخطوط بالترتيب شماره هاره به هم وصل كنيد..


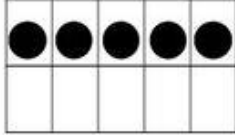



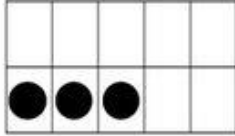
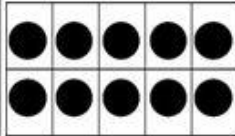
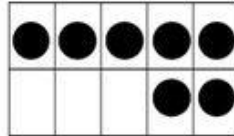

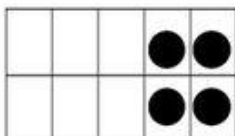
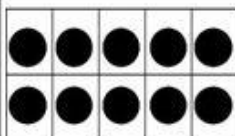
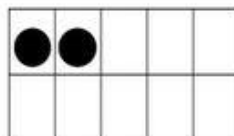

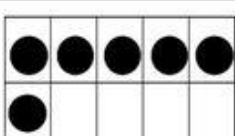




Μέτρησε τις βούλες και διάλεξε τον σωστό αριθμό./ Count the dots and select the correct number./ Comptez les points et choisissez le bon nombre.

عد الدائرات الصغيرة السوداء و اختار الرقم الصحيح تيشله يا حلقه گگ های سپاه را شمار کنيد و سر عدد درست علامت صحيح بکشيد..

Name \_\_\_\_\_

Can you Dab?  
Dab the correct number or color with a crayon.

 	 
<p>(14) (18) (15)</p>	<p>(18) (17) (19)</p>
 	 
<p>(14) (12) (13)</p>	<p>(16) (17) (15)</p>
 	 
<p>(13) (12) (14)</p>	<p>(12) (20) (14)</p>
 	 
<p>(10) (17) (16)</p>	<p>(18) (20) (19)</p>



Συμπλήρωσε τις αφαιρέσεις./ Complete the subtractions./ Remplissez les déductions.

اكتب نتيجة عملية الطرح. نتیجه سوال های منفی را بنویسید.

Name: \_\_\_\_\_

# Fall Subtraction

Directions: Subtract to solve.


$$\begin{array}{r} 13 \\ - 7 \\ \hline \end{array}$$
$$\begin{array}{r} 10 \\ - 2 \\ \hline \end{array}$$
$$\begin{array}{r} 12 \\ - 2 \\ \hline \end{array}$$
$$\begin{array}{r} 5 \\ - 4 \\ \hline \end{array}$$
$$\begin{array}{r} 14 \\ - 3 \\ \hline \end{array}$$
$$\begin{array}{r} 18 \\ - 2 \\ \hline \end{array}$$
$$\begin{array}{r} 13 \\ - 2 \\ \hline \end{array}$$
$$\begin{array}{r} 16 \\ - 3 \\ \hline \end{array}$$
$$\begin{array}{r} 11 \\ - 2 \\ \hline \end{array}$$
$$\begin{array}{r} 6 \\ - 6 \\ \hline \end{array}$$
$$\begin{array}{r} 13 \\ - 1 \\ \hline \end{array}$$
$$\begin{array}{r} 8 \\ - 7 \\ \hline \end{array}$$
$$\begin{array}{r} 9 \\ - 8 \\ \hline \end{array}$$
$$\begin{array}{r} 17 \\ - 2 \\ \hline \end{array}$$

$$\begin{array}{r} 10 \\ - 5 \\ \hline \end{array}$$
$$\begin{array}{r} 7 \\ - 7 \\ \hline \end{array}$$
$$\begin{array}{r} 15 \\ - 5 \\ \hline \end{array}$$

©Jenny-Lynn Creations

Subtracting 0-20