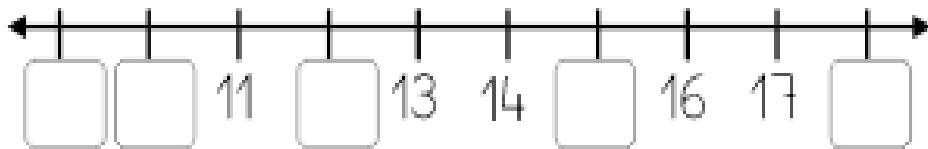
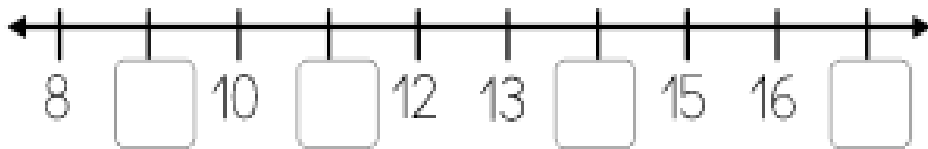
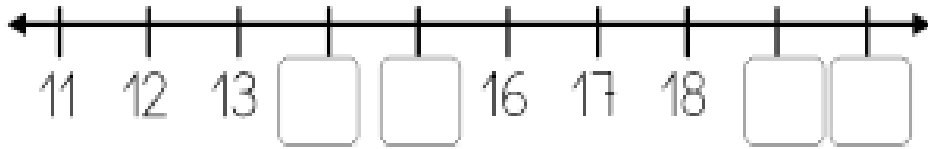
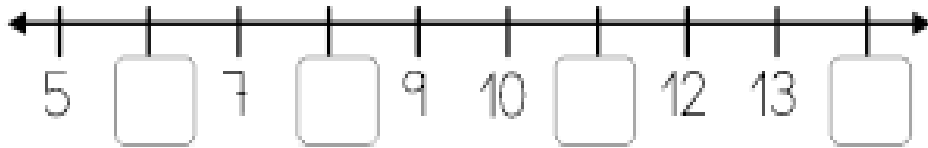
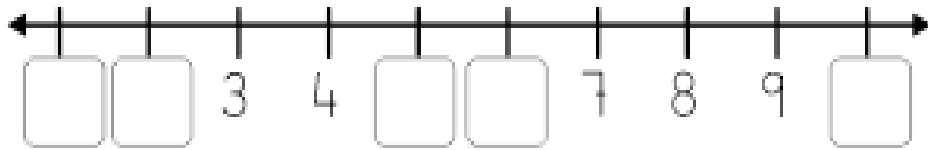
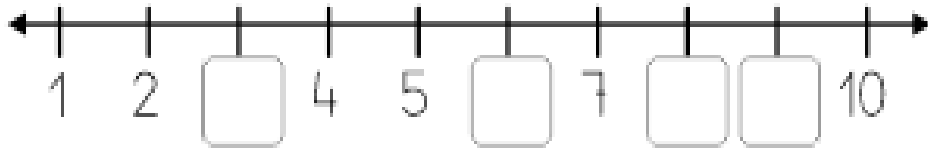


Γράψε τους αριθμούς που λείπουν. Write the missing numbers.

Écrivez les nombres manquants.

اكتب الارقام الناقصة

اعداد را در جاهای خالی بنویسید.



Γράψε τους αριθμούς που λείπουν. Write the missing numbers.

Écrivez les nombres manquants.

اكتب الارقام الناقصة

اعداد را در جاهای خالی بنویسید.

	1			2	
		3			4
	5			6	
		7			8
	9			10	
		11			12
	13			14	
		15			16
	17			18	
		19			20











Πρόσθεσε τα αντικείμενα και γράψε τον σωστό αριθμό.

Add the objects and write the correct number.

Ajoutez les objects et écrivez le numéro correct.

اجمع الاشكال و اكتب الرقم الصحيح.

عملیه جمع را انجام بدهید و شماره درست را بنویسید.

	+		=	<input type="text"/>
	+		=	<input type="text"/>
	+		=	<input type="text"/>
	+		=	<input type="text"/>
	+		=	<input type="text"/>



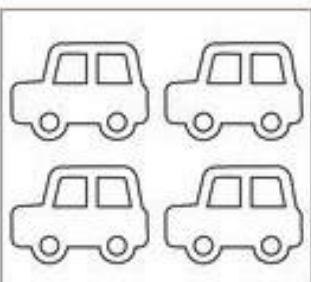
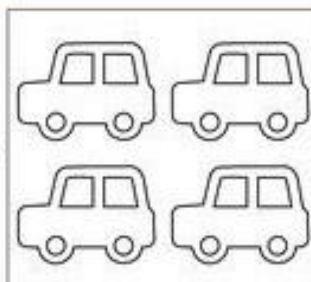
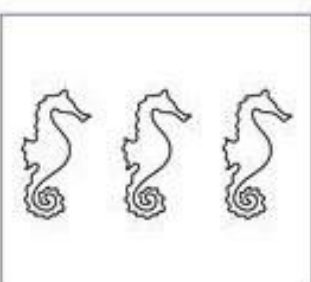
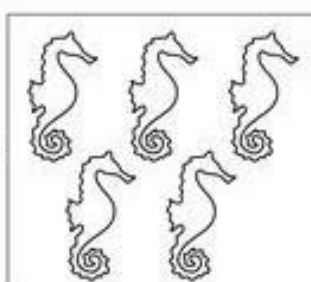


Πρόσθεσε τα αντικείμενα και γράψε τον σωστό αριθμό.

Add the objects and write the correct number.

Ajoutez les objects et écrivez le numéro correct.

اجمع الاشكال و اكتب الرقم الصحيح.



عملیه جمع را انجام بدهید و شماره درست را بنویسید.

	+		=	<input type="text"/>
	+		=	<input type="text"/>
	+		=	<input type="text"/>
	+		=	<input type="text"/>



Κάνε τις προσθέσεις. Add the numbers. Fais les ajouts.

سوال های جمع ذیل را حل نمایید.



قم بعمليات الجمع



$$\square + \square = \square$$



$$\square + \square = \square$$



$$\square + \square = \square$$



$$\square + \square = \square$$



$$\square + \square = \square$$

$$\square + \square = \square$$

$$\square + \square = \square$$

$$\square + \square = \square$$