

رياضيات / رياضی / ΜΑΘΗΜΑΤΙΚΑ

A-B 9-12

Οι αριθμοί 1-100

Numbers 1-100/ Numéros 1-100

اعداد از ۱-۱۰۰

الأرقام من 1 إلى 100


1	2	3	4	5	6	7	8	9	10
11	12	13	14	15	16	17	18	19	20
21	22	23	24	25	26	27	28	29	30
31	32	33	34	35	36	37	38	39	40
41	42	43	44	45	46	47	48	49	50
51	52	53	54	55	56	57	58	59	60
61	62	63	64	65	66	67	68	69	70
71	72	73	74	75	76	77	78	79	80
81	82	83	84	85	86	87	88	89	90
91	92	93	94	95	96	97	98	99	100

10	ten	δέκα
20	twenty	είκοσι
30	thirty	τριάντα
40	forty	σαράντα
50	fifty	πενήντα
60	sixty	εξήντα
70	seventy	εβδομήντα
80	eighty	ογδόντα
90	ninety	ενενήντα
100	one hundred	εκατό

Μέτρα τα κουτάκια, όπως στο παράδειγμα.

Count the boxes, as in the example. Comptez les carrés, comme l' exemple.


جدول ها را حساب کنید به طور مثال اول
عد المربعات كالمثال.





$$10 + 10 + 2 = 22$$



$$\dots + \dots = \dots$$



$$\dots + \dots + \dots + \dots = \dots$$



$$\dots + \dots + \dots = \dots$$



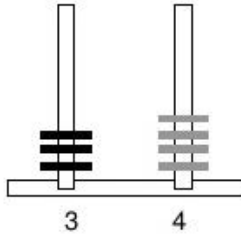
Κάνε τις προσθέσεις, όπως στο παράδειγμα.

Add the numbers, as in the example. Ajoutez les numéros comme l'exemple.

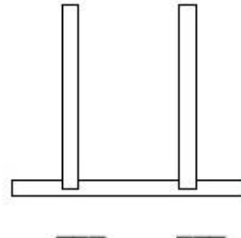
عملیه جمع را انجام دهید قسمی که در مثال اول انجام شده.

قم بعمليات كالمثال.

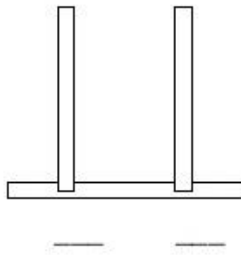
$$10 + 10 + 10 + 4$$



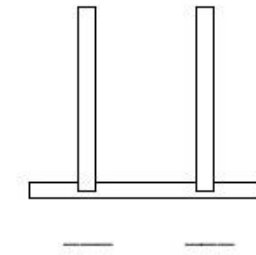
$$10 + 10 + 4$$



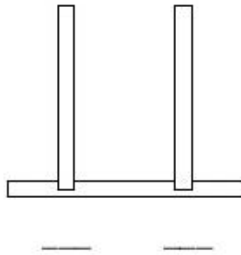
$$10 + 10 + 10 + 1$$



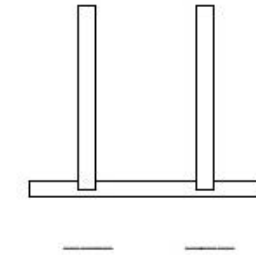
$$10 + 10 + 10 + 10 + 2$$



$$10 + 9$$



$$10 + 10 + 10 + 10 + 10 + 6$$



Συμπλήρωσε τους αριθμούς που λείπουν.

Write the missing letters. Ecrivez les numéros qui sont absents.

جاهای خالی را با پر کردن اعداد تکمیل کنید.

اکمل الارقام الناقصة.

1	2				6		8	9	
		13							20
						27			
				35					
									50
	52								
			64						70
					76				
81							88		
								99	