









Γράψε τους αριθμούς. Write the numbers. Ecrivez les nombres.

اكتب الارقام
اعداد را بنوبسید.

Name: _____

Expanded Form

Directions: Fill in the chart below to show how many hundreds, tens and ones. The first one has been done for you.

	Hundreds	Tens	Ones
 234	200	+	30
 513	○	+	○
 673	○	+	○
 947	○	+	○
 682	○	+	○
 870	○	+	○
 701	○	+	○
 457	○	+	○

Γράψε τους αριθμούς. Write the numbers. Ecrivez les nombres.


اكتب الارقام


اعداد را بنويسيد.

Name: _____

Adding 10 and 100 to a number

Make each number 10 or 100 more and less.

-10		+10
	154	
	253	
	319	
	462	
	390	
	616	
	248	

-100		+100
	253	
	483	
	319	
	191	
	537	
	658	
	490	

tic-tac-teach123

Κάνε τις προσθέσεις. Do the additions. Faites les ajouts.

عملیه جمع را انجام دهید.
قم بعمليات الجمع

$$\begin{array}{r} 62 \\ + 17 \\ \hline \end{array}$$

$$\begin{array}{r} 45 \\ + 67 \\ \hline \end{array}$$

$$\begin{array}{r} 13 \\ + 95 \\ \hline \end{array}$$

$$\begin{array}{r} 76 \\ + 78 \\ \hline \end{array}$$

$$\begin{array}{r} 43 \\ + 97 \\ \hline \end{array}$$

$$\begin{array}{r} 17 \\ + 64 \\ \hline \end{array}$$

$$\begin{array}{r} 36 \\ + 36 \\ \hline \end{array}$$

$$\begin{array}{r} 73 \\ + 10 \\ \hline \end{array}$$

$$\begin{array}{r} 45 \\ + 99 \\ \hline \end{array}$$

$$\begin{array}{r} 87 \\ + 46 \\ \hline \end{array}$$

$$\begin{array}{r} 47 \\ + 9 \\ \hline \end{array}$$

$$\begin{array}{r} 41 \\ + 67 \\ \hline \end{array}$$

$$\begin{array}{r} 78 \\ + 35 \\ \hline \end{array}$$

$$\begin{array}{r} 22 \\ + 97 \\ \hline \end{array}$$

$$\begin{array}{r} 65 \\ + 36 \\ \hline \end{array}$$

$$\begin{array}{r} 64 \\ + 59 \\ \hline \end{array}$$

Κάνε τις προσθέσεις με κρατούμενο.

Add the numbers with regrouping.

Ajoutez les nombres avec regroupement.

سوال های ذیل را جمع نماید.

. اجمع الأرقام جمع زیادة (إضافة) كما هو في المثال

$$\begin{array}{r} 12 \\ + 15 \\ \hline \end{array} \quad \begin{array}{r} 45 \\ + 20 \\ \hline \end{array} \quad \begin{array}{r} 52 \\ + 42 \\ \hline \end{array} \quad \begin{array}{r} 84 \\ + 12 \\ \hline \end{array}$$

$$\begin{array}{r} 29 \\ + 36 \\ \hline \end{array} \quad \begin{array}{r} 37 \\ + 24 \\ \hline \end{array} \quad \begin{array}{r} 57 \\ + 25 \\ \hline \end{array} \quad \begin{array}{r} 56 \\ + 38 \\ \hline \end{array}$$

$$\begin{array}{r} 36 \\ + 96 \\ \hline \end{array} \quad \begin{array}{r} 85 \\ + 21 \\ \hline \end{array} \quad \begin{array}{r} 20 \\ + 39 \\ \hline \end{array} \quad \begin{array}{r} 74 \\ + 25 \\ \hline \end{array}$$

$$\begin{array}{r} 63 \\ + 25 \\ \hline \end{array} \quad \begin{array}{r} 66 \\ + 25 \\ \hline \end{array} \quad \begin{array}{r} 15 \\ + 87 \\ \hline \end{array} \quad \begin{array}{r} 45 \\ + 35 \\ \hline \end{array}$$

Κάνε τις προσθέσεις με κρατούμενο.

Add the numbers with regrouping.

Ajoutez les nombres avec regroupement.

سوال های ذیل را جمع نماید.

اجمع الأرقام جمع زیادة (إضافة) كما هو في المثال .

Solve each addition problem.
Color answers that round to 800 purple.
Color answers that round to 900 pink.

Name: _____

$\begin{array}{r} 269 \\ +499 \\ \hline \end{array}$	$\begin{array}{r} 375 \\ +447 \\ \hline \end{array}$	$\begin{array}{r} 499 \\ +425 \\ \hline \end{array}$
$\begin{array}{r} 369 \\ +485 \\ \hline \end{array}$	$\begin{array}{r} 389 \\ +496 \\ \hline \end{array}$	$\begin{array}{r} 398 \\ +447 \\ \hline \end{array}$

STOP
BUGGING
ME!