

A3. 9-12

Mathematics

Γράψε τους αριθμούς που λείπουν.

Write the missing numbers.

Écrivez les nombres manquants.

اكتب الارقام الناقصة

اعداد را در جاهای خالی بنویسید

$6 + \underline{\quad} = 10$	$3 + \underline{\quad} = 8$	$5 + \underline{\quad} = 9$
$\underline{\quad} + 10 = 12$	$\underline{\quad} + 8 = 10$	$\underline{\quad} + 9 = 11$
$9 + \underline{\quad} = 12$	$3 + \underline{\quad} = 14$	$7 + \underline{\quad} = 8$
$\underline{\quad} + 6 = 11$	$\underline{\quad} + 5 = 6$	$\underline{\quad} + 4 = 7$
$5 + \underline{\quad} = 8$	$7 + \underline{\quad} = 10$	$3 + \underline{\quad} = 12$
$\underline{\quad} + 9 = 12$	$\underline{\quad} + 5 = 7$	$\underline{\quad} + 4 = 8$
$4 + \underline{\quad} = 9$	$3 + \underline{\quad} = 9$	$7 + \underline{\quad} = 11$
$\underline{\quad} + 4 = 11$	$\underline{\quad} + 9 = 9$	$\underline{\quad} + 0 = 20$

Whole 12	
Part 3	Part

Whole 15	
Part 9	Part

Whole 20	
Part	Part 5

Γράψε τους αριθμούς που λείπουν.

Write the missing numbers.

Écrivez les nombres manquants.

اكتب الارقام الناقصة

اعداد را در جاهای خالی بنویسید

1) $11 - 3 = \underline{\quad}$

2) $9 - 6 = \underline{\quad}$

3) $\underline{\quad} - 2 = 5$

4) $\underline{\quad} - 1 = 9$

5) $6 - \underline{\quad} = 3$

6) $8 - \underline{\quad} = 6$

7) $10 - \underline{\quad} = 5$

8) $\underline{\quad} - 2 = 5$

9) $\underline{\quad} - 4 = 1$

10) $11 - 5 = \underline{\quad}$

11) $10 - 7 = \underline{\quad}$

12) $\underline{\quad} - 3 = 5$

13) $11 - 9 = \underline{\quad}$

14) $8 - \underline{\quad} = 1$

15) $9 - \underline{\quad} = 4$

16) $\underline{\quad} - 5 = 2$

17) $9 - 7 = \underline{\quad}$

18) $11 - 7 = \underline{\quad}$

19) $\underline{\quad} - 5 = 5$

20) $\underline{\quad} - 4 = 8$

21) $12 - \underline{\quad} = 10$

22) $9 - \underline{\quad} = 1$

23) $\underline{\quad} - 4 = 7$

24) $12 - 9 = \underline{\quad}$

25) $12 - \underline{\quad} = 4$

26) $\underline{\quad} - 8 = 3$

Γράψε τους αριθμούς που λείπουν.

Write the missing numbers.

Écrivez les nombres manquants.

اكتب الارقام الناقصة

اعداد را در جاهای خالی بنویسید

- | | |
|---------------------|---------------------|
| 1) 13 - 8 = _____ | 11) 14 - 8 = _____ |
| 2) 12 - 6 = _____ | 12) 16 - 10 = _____ |
| 3) 10 - 7 = _____ | 13) 15 - 6 = _____ |
| 4) 15 - 4 = _____ | 14) 19 - 4 = _____ |
| 5) 17 - 3 = _____ | 15) 17 - 6 = _____ |
| 6) 9 - 7 = _____ | 16) 13 - 10 = _____ |
| 7) 13 - 11 = _____ | 17) 20 - 8 = _____ |
| 8) 15 - 5 = _____ | 18) 19 - 7 = _____ |
| 9) 10 - 6 = _____ | 19) 16 - 14 = _____ |
| 10) 12 - 10 = _____ | 20) 18 - 15 = _____ |

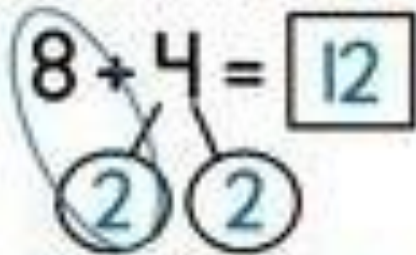
Γράψε τους αριθμούς που λείπουν.

Write the missing numbers.

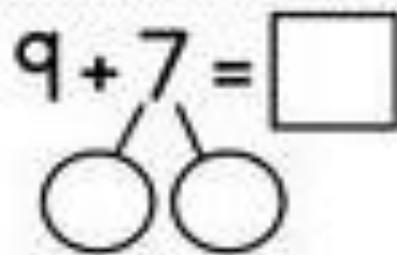
Écrivez les nombres manquants.

اكتب الارقام الناقصة

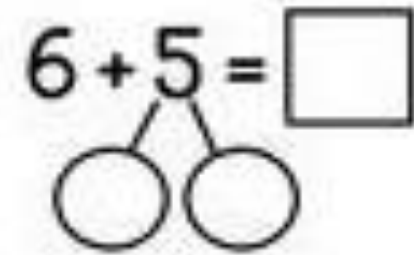
اعداد را در جاهای خالی بنویسید

$$8 + 4 = 12$$


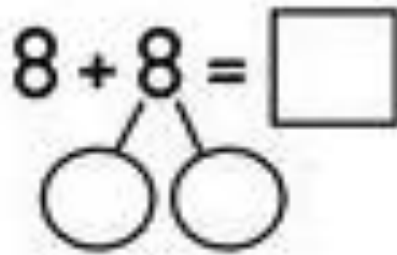
$$\underline{10} + \underline{2} = \underline{12}$$

$$9 + 7 = \square$$


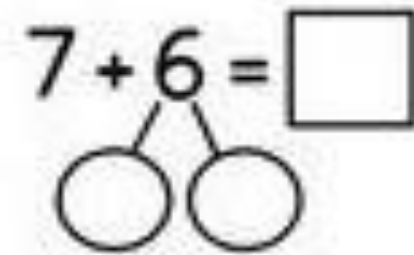
$$\underline{\quad} + \underline{\quad} = \underline{\quad}$$

$$6 + 5 = \square$$


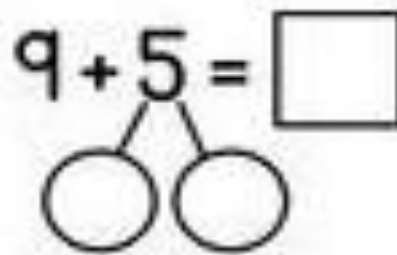
$$\underline{\quad} + \underline{\quad} = \underline{\quad}$$

$$8 + 8 = \square$$


$$\underline{\quad} + \underline{\quad} = \underline{\quad}$$

$$7 + 6 = \square$$


$$\underline{\quad} + \underline{\quad} = \underline{\quad}$$

$$9 + 5 = \square$$


$$\underline{\quad} + \underline{\quad} = \underline{\quad}$$

Γράψε τους αριθμούς που λείπουν.

Write the missing numbers.

Écrivez les nombres manquants.

اكتب الارقام الناقصة

اعداد را در جاهای خالی بنویسید

$$5 + 5 + 3 = \boxed{13}$$

10

$$5 + 7 + 3 = \boxed{}$$

$$1 + 8 + 2 = \boxed{}$$

$$6 + 4 + 7 = \boxed{}$$

$$1 + 9 + 7 = \boxed{}$$

$$5 + 3 + 7 = \boxed{}$$

$$9 + 5 + 5 = \boxed{}$$

$$4 + 6 + 3 = \boxed{}$$

$$2 + 8 + 1 = \boxed{}$$

$$9 + 9 + 1 = \boxed{}$$