


ΜΑΘΗΜΑΤΙΚΑ/ MATHEMATICS / رياضيات رياض

- Γράψε τους αριθμούς που λείπουν στα κενά πριν, ανάμεσα και μετά.
 - Write the numbers (before, between, after)
- Écrivez les nombres manquants dans les espaces avant, entre et après.
 - اكتب الارقام الناقصة التي قبل، ما بين، أو بعد الارقام الموجودة، في الفراغات
- جاهای خالی را با نوشتن اعداد پر کنید عداد های که قبل و بعد از حروف های موجود نوشته میشود

Name _____

Before and After Numbers 1-20

Wake Up Groundhog! 

Write the numbers that come before and after.

4	5	6		17	
	12			10	
	8			15	
	14			19	
	2			7	

- Γράψε τους αριθμούς από τον μικρότερο στον μεγαλύτερο.
- Write the numbers in order from least to greatest.
- Écrivez les nombres du plus petit au plus grand.
- اكتب الارقام من الرقم الاصغر الى الاكبر.
- اعداد ها را بنويسيد از اعداد كوچك شروع به سمت شماره بزرگ

Cloudy Skies

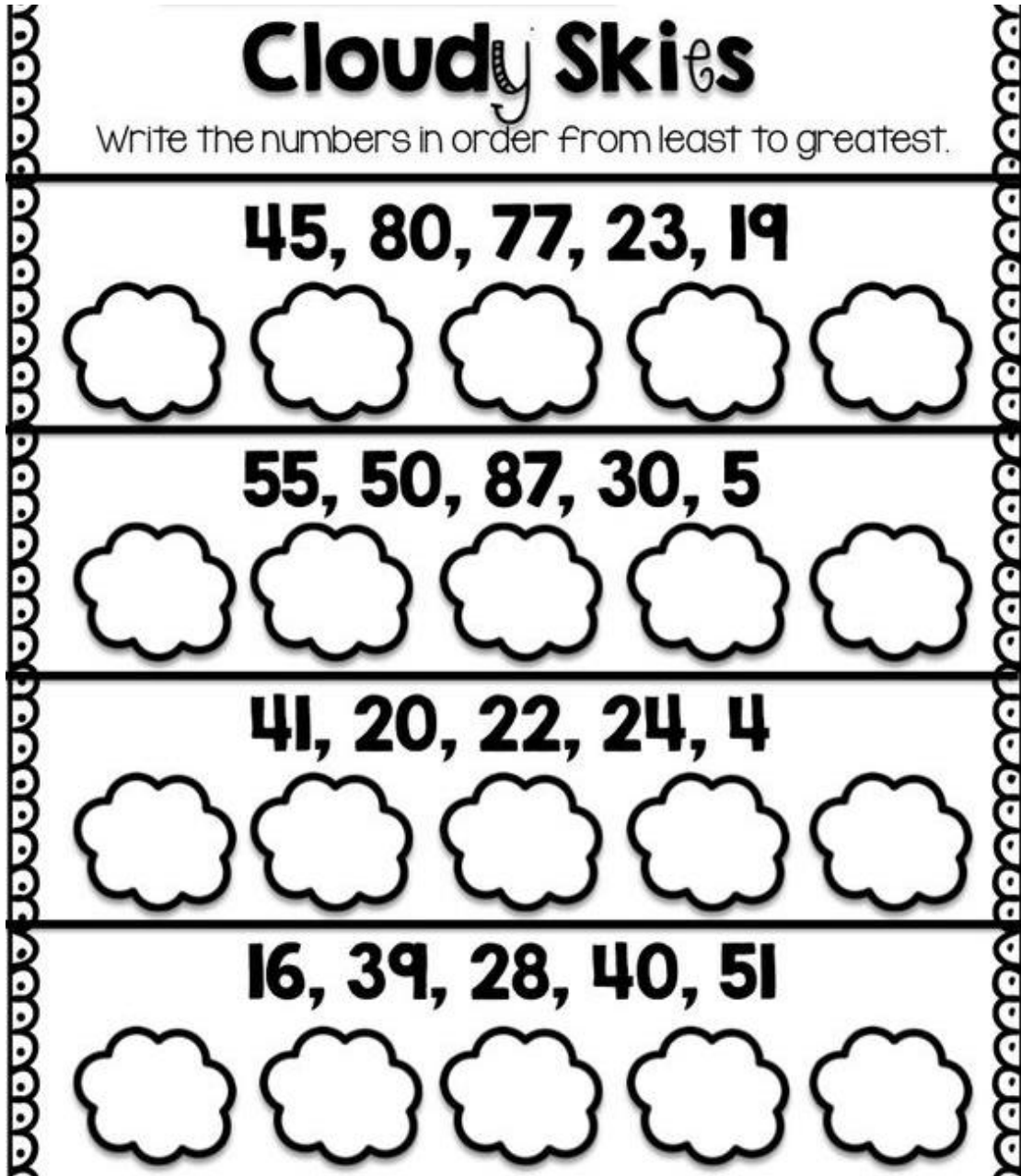
Write the numbers in order from least to greatest.

45, 80, 77, 23, 19


55, 50, 87, 30, 5

41, 20, 22, 24, 4

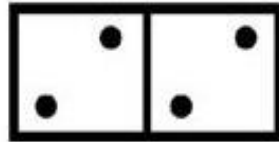
16, 39, 28, 40, 51




- Κάνε τις προσθέσεις.
- Make the additions.
- Faites les ajouts.
- قم بعمليات الجمع.
- عملیه جمع را انجام دهید.




$5+3=\square$



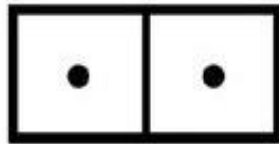
$2+2=\square$




$5+2=\square$



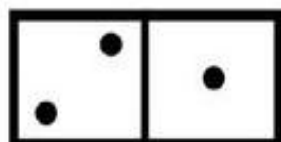
$6+3=\square$




$1+1=\square$




$4+2=\square$



$2+1=\square$



$3+2=\square$



$5+5=\square$

- Κάνε τις προσθέσεις.
- Make the additions.
- Faites les ajouts.
- قم بعمليات الجمع.
- عملیه جمع را انجام دهید.

$$\begin{array}{r} 2 \\ + 3 \\ \hline \end{array}$$

$$\begin{array}{r} 1 \\ + 2 \\ \hline \end{array}$$

$$\begin{array}{r} 2 \\ + 4 \\ \hline \end{array}$$

$$\begin{array}{r} 3 \\ + 3 \\ \hline \end{array}$$

$$\begin{array}{r} 6 \\ + 2 \\ \hline \end{array}$$

$$\begin{array}{r} 5 \\ + 3 \\ \hline \end{array}$$

$$\begin{array}{r} 7 \\ + 2 \\ \hline \end{array}$$

$$\begin{array}{r} 6 \\ + 4 \\ \hline \end{array}$$

$$\begin{array}{r} 4 \\ + 2 \\ \hline \end{array}$$

$$\begin{array}{r} 3 \\ + 3 \\ \hline \end{array}$$

$$\begin{array}{r} 8 \\ + 2 \\ \hline \end{array}$$

$$\begin{array}{r} 4 \\ + 3 \\ \hline \end{array}$$

- Κάνε τις προσθέσεις.
- Make the additions.
- Faites les ajouts.
- قم بعمليات الجمع.
- عملیه جمع را انجام دهید.

Double Digit Addition

1.

$$\begin{array}{r} 18 \\ + 31 \\ \hline \end{array}$$

2.

$$\begin{array}{r} 42 \\ + 13 \\ \hline \end{array}$$

3.

$$\begin{array}{r} 48 \\ + 11 \\ \hline \end{array}$$

4.

$$\begin{array}{r} 16 \\ + 22 \\ \hline \end{array}$$

5.

$$\begin{array}{r} 61 \\ + 62 \\ \hline \end{array}$$

6.

$$\begin{array}{r} 22 \\ + 16 \\ \hline \end{array}$$

7.

$$\begin{array}{r} 10 \\ + 71 \\ \hline \end{array}$$

8.

$$\begin{array}{r} 53 \\ + 45 \\ \hline \end{array}$$

9.

$$\begin{array}{r} 41 \\ + 34 \\ \hline \end{array}$$

10.

$$\begin{array}{r} 21 \\ + 44 \\ \hline \end{array}$$

11.

$$\begin{array}{r} 84 \\ + 15 \\ \hline \end{array}$$

12.

$$\begin{array}{r} 61 \\ + 33 \\ \hline \end{array}$$

13.

$$\begin{array}{r} 21 \\ + 44 \\ \hline \end{array}$$

14.

$$\begin{array}{r} 41 \\ + 53 \\ \hline \end{array}$$

15.

$$\begin{array}{r} 24 \\ + 53 \\ \hline \end{array}$$

