

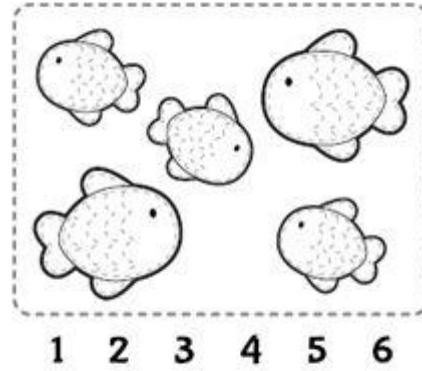





ΜΑΘΗΜΑΤΙΚΑ/ MATHEMATICS / رياضيات رياض




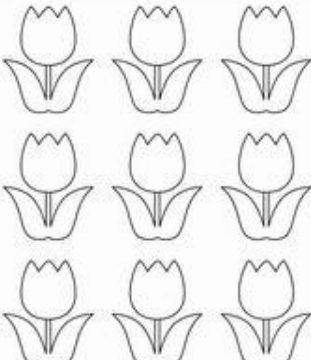
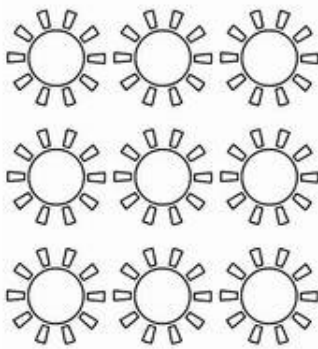

- Μέτρησε τα αντικείμενα και γράψε τον σωστό αριθμό.
- Count the objects and write the correct number.
- Comptez les objets et écrivez le nombre correct.
- شکل ذیل را شمار کنید و با شماره صحیح وصل کنید.
- عد الاشكال و اكتب الرقم الصحيح



- Μέτρησε τα αντικείμενα και γράψε τον σωστό αριθμό.
 - Count the objects and write the correct number.
 - Comptez les objets et écrivez le nombre correct.
 - شکل ذیل را شمار کنید و با شماره صحیح وصل کنید.
 - عد الاشكال و اكتب الرقم الصحيح

Name:

How many are there?

| | |
|---|--|
|  5 6 7 |  5 6 7 |
|  7 8 9 |  7 8 9 |
|  8 9 10 |  8 9 10 |




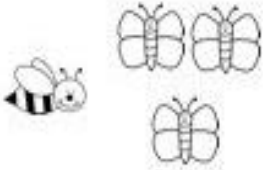

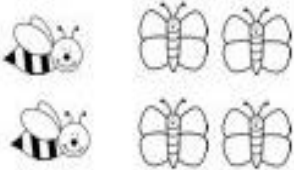



By Lavinia Pop © 2014

- Κάνε τις πράξεις.
- Do the math.
- Fais le calcul.
- قم بالعمليات
- عملیه ضرب را انجام دهید

Garden Bug Addition



Count. Write the number.

| | | |
|--|--|---|
|  $2 + 2 = \square$ |  $3 + 4 = \square$ |  $5 + 1 = \square$ |
|  $1 + 3 = \square$ |  $5 + 5 = \square$ |  $2 + 4 = \square$ |
|  $4 + 5 = \square$ |  $3 + 3 = \square$ |  $4 + 4 = \square$ |

- Κάνε τις πράξεις.
- Do the math.
- Fais le calcul.
- قم بالعمليات
- عملیه ضرب را انجام دهید

| | | |
|-----------|----------|-------------|
| $2 + 1 =$ | 3 | ●●●○○○○○○○○ |
| $2 + 3 =$ | | ○○○○○○○○○○ |
| $4 + 4 =$ | | ○○○○○○○○○○ |
| $2 + 2 =$ | | ○○○○○○○○○○ |
| $4 + 2 =$ | | ○○○○○○○○○○ |
| $3 + 4 =$ | | ○○○○○○○○○○ |
| $3 + 7 =$ | | ○○○○○○○○○○ |

Write the sums.

| | | | |
|-----------|----------------------|-----------|----------------------|
| $1 + 1 =$ | <input type="text"/> | $5 + 2 =$ | <input type="text"/> |
| $5 + 3 =$ | <input type="text"/> | $3 + 3 =$ | <input type="text"/> |
| $2 + 4 =$ | <input type="text"/> | $2 + 6 =$ | <input type="text"/> |
| $1 + 3 =$ | <input type="text"/> | $4 + 5 =$ | <input type="text"/> |
| $2 + 1 =$ | <input type="text"/> | $5 + 1 =$ | <input type="text"/> |
| $2 + 2 =$ | <input type="text"/> | $3 + 2 =$ | <input type="text"/> |
| $6 + 4 =$ | <input type="text"/> | $3 + 6 =$ | <input type="text"/> |

- Κάνε τις πράξεις.
- Do the math.
- Fais le calcul.
- قم بالعمليات
- عملیه ضرب را انجام دهید

| | | |
|------------------------------|------------------------------|------------------------------|
| $9 + 11 = \underline{\quad}$ | $12 + 8 = \underline{\quad}$ | $18 + 2 = \underline{\quad}$ |
| $7 + 11 = \underline{\quad}$ | $18 - 4 = \underline{\quad}$ | $5 + 14 = \underline{\quad}$ |
| $15 - 3 = \underline{\quad}$ | $16 - 3 = \underline{\quad}$ | $19 - 8 = \underline{\quad}$ |
| $17 - 3 = \underline{\quad}$ | $1 + 18 = \underline{\quad}$ | $15 - 4 = \underline{\quad}$ |
| $13 + 2 = \underline{\quad}$ | $1 + 15 = \underline{\quad}$ | $6 + 11 = \underline{\quad}$ |
| $19 - 3 = \underline{\quad}$ | $13 - 2 = \underline{\quad}$ | $18 - 1 = \underline{\quad}$ |
| $14 + 2 = \underline{\quad}$ | $16 + 2 = \underline{\quad}$ | $15 - 2 = \underline{\quad}$ |
| $2 + 11 = \underline{\quad}$ | $12 + 6 = \underline{\quad}$ | $14 - 1 = \underline{\quad}$ |
| $4 + 11 = \underline{\quad}$ | $6 + 13 = \underline{\quad}$ | $1 + 14 = \underline{\quad}$ |
| $15 - 1 = \underline{\quad}$ | $19 - 7 = \underline{\quad}$ | $14 - 4 = \underline{\quad}$ |

| | |
|-------------------------------|-------------------------------|
| $\underline{\quad} + 1 = 14$ | $\underline{\quad} + 3 = 20$ |
| $\underline{\quad} + 14 = 15$ | $14 + \underline{\quad} = 17$ |
| $16 + \underline{\quad} = 20$ | $\underline{\quad} + 12 = 19$ |
| $\underline{\quad} + 12 = 18$ | $13 + \underline{\quad} = 14$ |
| $\underline{\quad} + 4 = 18$ | $8 + \underline{\quad} = 19$ |
| $11 + \underline{\quad} = 13$ | $\underline{\quad} + 12 = 20$ |
| $7 + \underline{\quad} = 18$ | $\underline{\quad} + 11 = 17$ |
| $\underline{\quad} + 15 = 19$ | $5 + \underline{\quad} = 16$ |
| $6 + \underline{\quad} = 17$ | $14 + \underline{\quad} = 15$ |