










ΜΑΘΗΜΑΤΙΚΑ 13-17 Β

Κυκλώστε τη σωστή μονάδα μέτρησης για τα παρακάτω παραδείγματα
 Draw a circle around the correct measurement unit for the examples below.
 Tracez un cercle autour de l'unité de mesure correcte pour les exemples ci-dessous.
 ارسم دائرة حول وحدة القياس الصحيحة للأمثال أدناه
 برای اندازه گیری اشکال زیر از چه چیزی استفاده می شود دور آن دایره بکشید.

Length of a calendar 	Length of track 	Distance travelled by a plane 
cm / m / km	cm / m / km	cm / m / km
Width of a shirt 	Height of a man 	Length of a pair of scissors 
cm / m / km	cm / m / km	cm / m / km
Distance travelled by a car 	Length of a soccer field 	Height of a tree 
cm / m / km	cm / m / km	cm / m / km

Note: We measure shorter lengths (smaller objects like pencils) in centimeters (cm) and longer lengths (like height) in meters (m). We measure longer distances in kilometers (km).

Διαβάστε και απαντήστε σε κάθε ερώτηση :

Read and answer each question:

Lisez et répondez à chaque question:

بخوانید و جواب هر سوال را بدهید

اقرأوا و جاوبوا على كل سؤال

A piece of wire is 24 meters long. If the wire is cut into 6 equal pieces, how long is each piece of wire?

Last year, Sean was 105cm tall. He grew 12 cm in the past year. How tall is he now?

Διαβάστε και απαντήστε σε κάθε ερώτηση :

Read and answer each question:

Lisez et répondez à chaque question :

بخوانید و جواب هر سوال را بدهید

اقرأوا و جاوبوا على كل سؤال

Each truck is 45 meters long. What is the total length of the 2 trucks?

Seven parking spots is 28 meters wide. What is the width of 3 parking spots?

Κυκλώστε τη σωστή απάντηση.

Circle the correct answer.

Encerclez la bonne réponse.

ضع دائرة حول الإجابة الصحيحة.

جواب درست را حلقه کنید.

1. Which unit would you use to measure the length of a bath tub?
 - a. Millimeters
 - b. Centimeters
 - c. Meters
 - d. Kilometers

2. Which unit would you use to measure the distance between 2 cities?
 - a. Millimeters
 - b. Centimeters
 - c. Meters
 - d. Kilometers

3. Which unit would you use to measure the width of a door?
 - a. Millimeters
 - b. Centimeters
 - c. Meters
 - d. Kilometers

4. Which unit would you use to measure the height of a building?
 - a. Millimeters
 - b. Centimeters
 - c. Meters
 - d. Kilometers

Διαβάστε και απαντήστε σε κάθε ερώτηση :

Read and answer each question:

Lisez et répondez à chaque question :

بخوانید و جواب هر سوال را بدهید

اقرأوا و جاوبوا على كل سؤال

Jason's laptop is 25cm long. The width is 5cm longer than the length. What is the width of Jason's computer?

The bench is 80cm long. If four benches are put alongside in the gym, what is the total length of four benches?