

Math_9-12 A

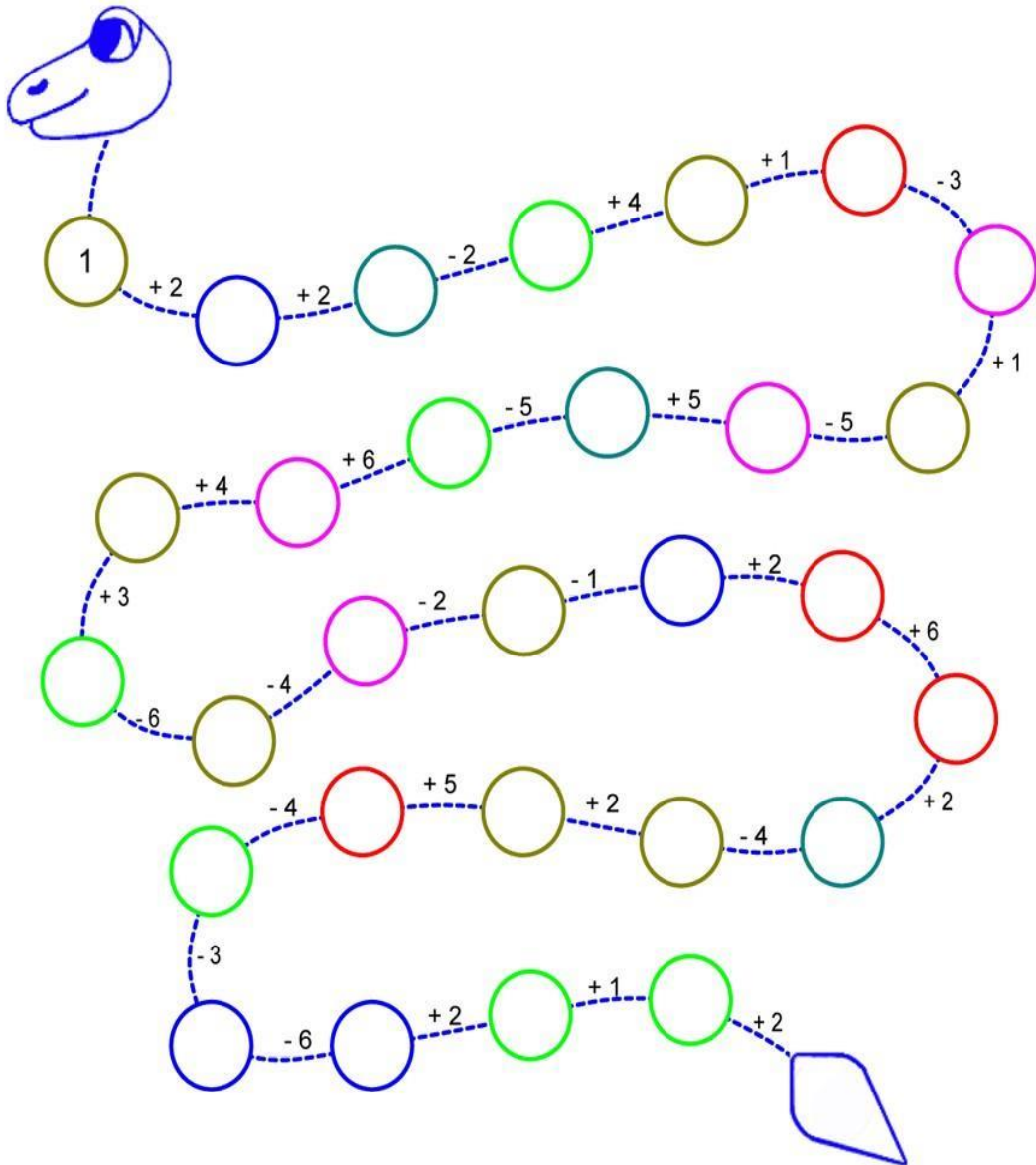
Γράψε τους αριθμούς που λείπουν.

Write the missing numbers.

Écrivez les nombres manquants.

اكتب الارقام الناقصة

اعداد ناقص را بنويسيد



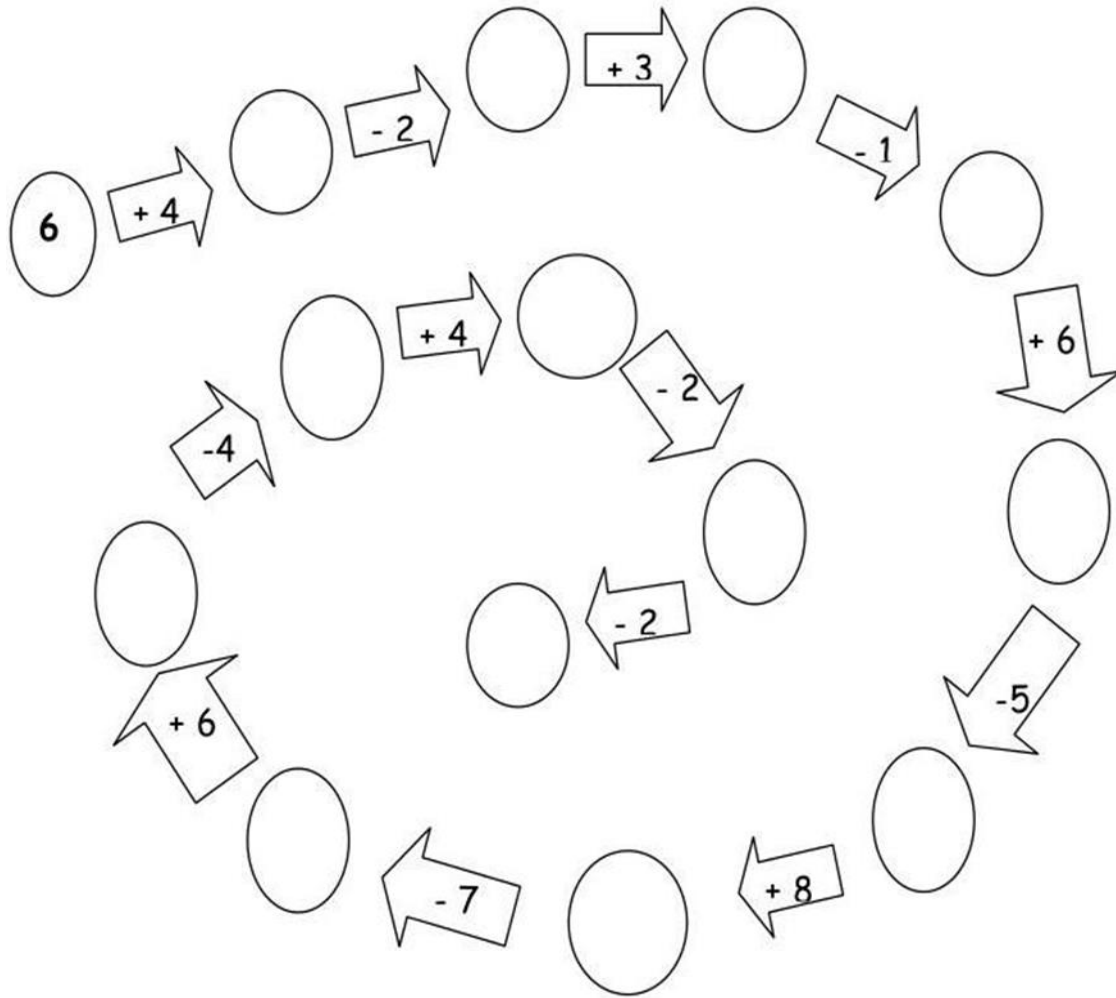
Γράψε τους αριθμούς που λείπουν.

Write the missing numbers.

Écrivez les nombres manquants.

اكتب الارقام الناقصة

اعداد ناقص را بنويسيد



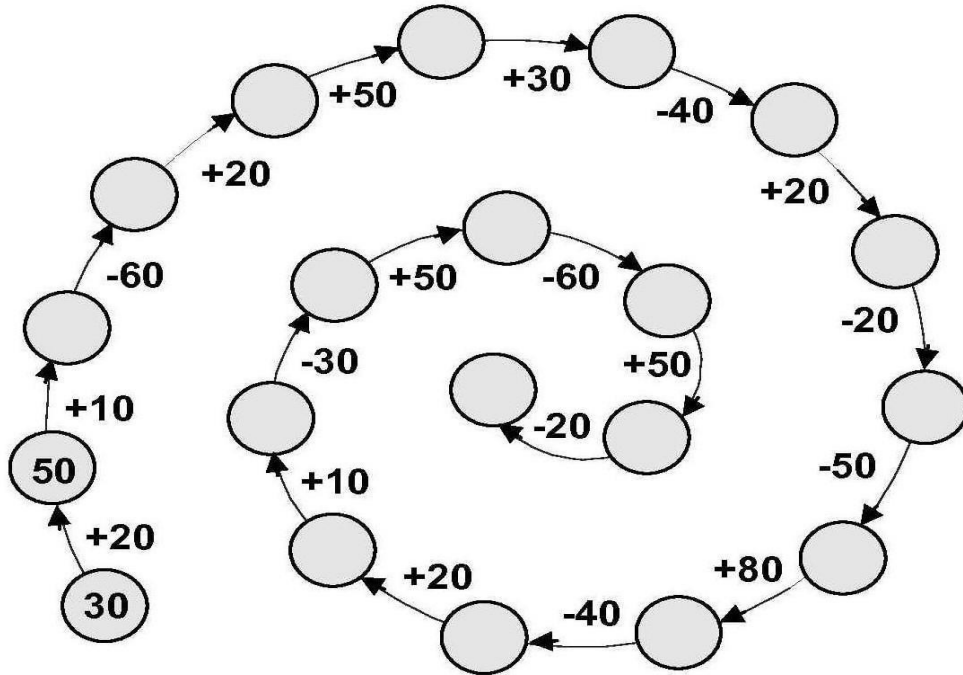
Γράψε τους αριθμούς που λείπουν.

Write the missing numbers.

Écrivez les nombres manquants.

اكتب الارقام الناقصة

اعداد ناقص را بنويسيد



90 - 20 = <input type="text"/>	70 - 50 = <input type="text"/>	80 - 60 = <input type="text"/>
60 + 30 = <input type="text"/>	50 + 20 = <input type="text"/>	40 + 40 = <input type="text"/>
40 + 50 = <input type="text"/>	60 + 40 = <input type="text"/>	70 - 60 = <input type="text"/>

Γράψε τους αριθμούς που λείπουν.

Write the missing numbers.

Écrivez les nombres manquants.

اكتب الارقام الناقصة

اعداد ناقص را بنويسيد

$$\underline{\quad} + 20 = 100$$

$$\underline{\quad} + 30 = 100$$

$$\underline{\quad} + 10 = 100$$

$$\underline{\quad} + 90 = 100$$

$$\underline{\quad} + 60 = 100$$

$$\underline{\quad} + 80 = 100$$

$$\underline{\quad} + 50 = 100$$

$$\underline{\quad} + 40 = 100$$

$$\underline{\quad} + 70 = 100$$

$$\underline{\quad} + 0 = 100$$

$$\underline{\quad} + 79 = 100$$

$$\underline{\quad} + 99 = 100$$

$$\underline{\quad} + 59 = 100$$

$$\underline{\quad} + 49 = 100$$

$$\underline{\quad} + 29 = 100$$

$$\underline{\quad} + 39 = 100$$

Γράψε τους αριθμούς που λείπουν.

Write the missing numbers.

Écrivez les nombres manquants.

اكتب الارقام الناقصة

اعداد ناقص را بنويسيدا

$21 + \underline{\quad} = 100$

$64 + \underline{\quad} = 100$

$36 + \underline{\quad} = 100$

$62 + \underline{\quad} = 100$

$73 + \underline{\quad} = 100$

$19 + \underline{\quad} = 100$

$56 + \underline{\quad} = 100$

$27 + \underline{\quad} = 100$

$24 + \underline{\quad} = 100$

$15 + \underline{\quad} = 100$

$41 + \underline{\quad} = 100$

$53 + \underline{\quad} = 100$

$86 + \underline{\quad} = 100$

$98 + \underline{\quad} = 100$

$91 + \underline{\quad} = 100$

$79 + \underline{\quad} = 100$

$66 + \underline{\quad} = 100$

$55 + \underline{\quad} = 100$